

**Atul Vidyalaya  
MATHEMATICS**

Name :

Division :

SUMS IN SYMMETRY

Draw the lines of symmetry for the following figures



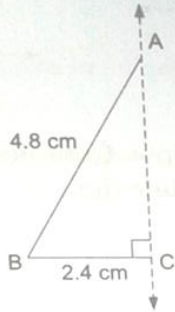
# Atul Vidyalaya MATHEMATICS

Name :

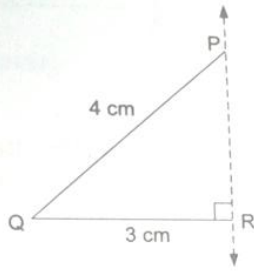
Division :

Complete the following figures about the given lines of symmetry which have been shown by broken lines and name the figures thus obtained.

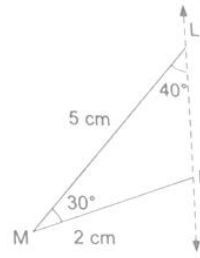
(a)



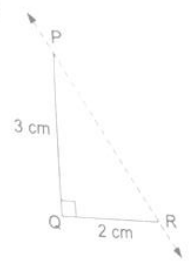
(b)



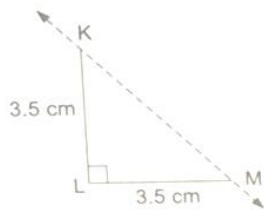
(c)



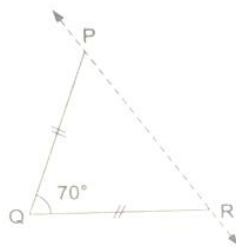
(d)



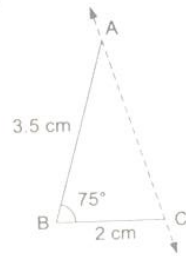
(e)



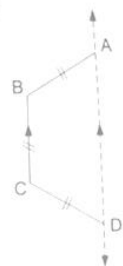
(f)



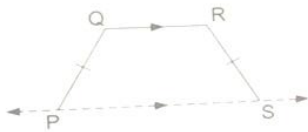
(g)



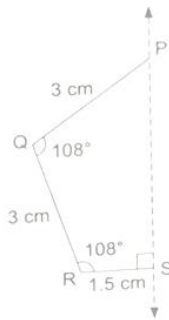
(h)



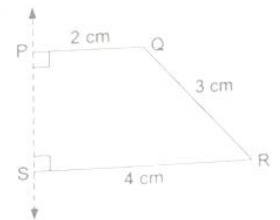
(i)



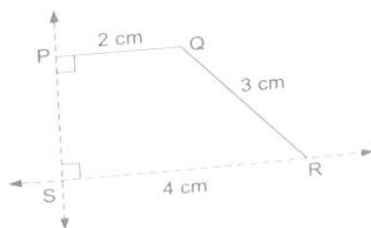
(j)



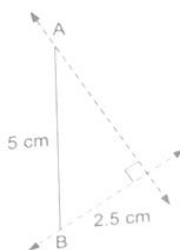
(k)



(l)



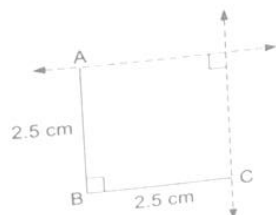
(m)



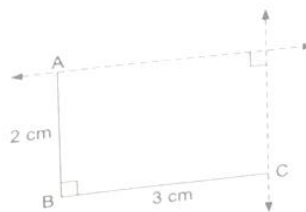
(n)



(o)



(p)



(q)

